
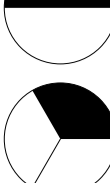
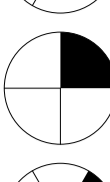
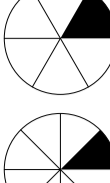
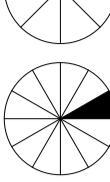




-  Le disque complet
 360°
-  Le demi-disque
 $360 \div 2 = 180^\circ$
-  Le tiers du disque
 $360 \div 3 = 120^\circ$
-  Le quart du disque
 $360 \div 4 = 90^\circ$
-  Le sixième du disque
 $360 \div 6 = 60^\circ$
-  Le huitième du disque
 $360 \div 8 = 45^\circ$
-  Le douzième du disque
 $360 \div 12 = 30^\circ$